

Student Growth Goal - Data and Calculations:

Local & State Growth

TEACHER: Jane Doe 5th Grade Teacher

School: Barren County Elementary

STUDENT GROWTH GOAL:

For the current school year, 100% of my students will make measurable progress in Applying Disciplinary Tools and Concepts in the areas of civics, culture and society, economics, geography and history. 85% of my students will meet proficiency by scoring an 80% or better on the developed post-test.

GOALS:

RUBRIC:

Proficiency Goal: 85% of my students will meet proficiency by scoring an 80% or better on the Post-Test.

My proficiency rating is determined as follows:

- High Proficiency =** More than 94%
- Expected Proficiency =** Between 77% and 94%
- Low Proficiency =** Less than 77%

Growth Goal: 100% of my students will make measurable growth from pre to post test.

My growth rating is determined as follows:

- High Growth =** 85% or higher
- Expected Growth =** Between 60% and 84%
- Low Growth =** 59% or less

ASSESSMENT DETAILS AND SAMPLE REPORTS:

Class/Subject: 5th Grade Social Studies

Identify sources of evidence needed:

1. Pretest (25 item)
2. District Common Formative Assessment (10 item)
3. District Common Formative Assessment (10 item)
4. Post Test (25 item)

When evidence is available?

1. by Nov. 1
2. by Dec. 1
3. by Feb. 1
4. by Apr. 1

Attach sample reports/evidence that will allow goals to be scored.

POST-TEST ANALYSIS + STATE CONTRIBUTIONS:

Proficiency Percentage:

Proficiency Rating: Choose from dropdown

Local Growth Percentage:

Local Student Growth Choose from dropdown

		LOCAL GROWTH RATING		
		L	E	H
PROFICIENCY	H	E	E	H
	E	E	E	E
	L	E	E	E
		L	E	H
GROWTH				

Local Student Growth Rating: Choose from dropdown

State Student Growth Rating: Choose from dropdown
(grades 4-8 Reading/Math)

OVERALL STUDENT GROWTH RATING:

Based on the proficiency rating and local and state student growth ratings above, utilizing the table at the right your Overall Student Growth Rating is:

Choose from dropdown

		OVERALL GROWTH RATING		
		L	E	H
STATE	H	E	E	H
	E	E	E	E
	L	E	E	E
		L	E	H
LOCAL				

Student Name	Nov. 1 Pretest Score	DEC CFA	FEB CFA	March 30 Post Test	Proficiency Met?	Growth Met?
1 John Smity	45	80	70	85	Y	Y
2 Bill Morgan	75	60	80	95	Y	Y
3 John Doe	50	60	70	80	Y	Y
4 Susie Smith	35	50	50	70	N	Y
5 Jane Alexo	60	70	80	85	Y	Y
6 Mary	30	80	70	80	Y	Y
7 Abe	40	90	80	80	Y	Y
8 Jim	50	90	90	90	Y	Y
9 John	75	90	90	90	Y	Y
10 Luke	75	80	90	95	Y	Y

9/10 met proficiency goal 90%

10/10 made measurable growth 100%

Test Booklet

Subject: SS, Grade: 5t

Mansfield SGG Assessment - copy for Shari
Alexander to edit

Student name: _____

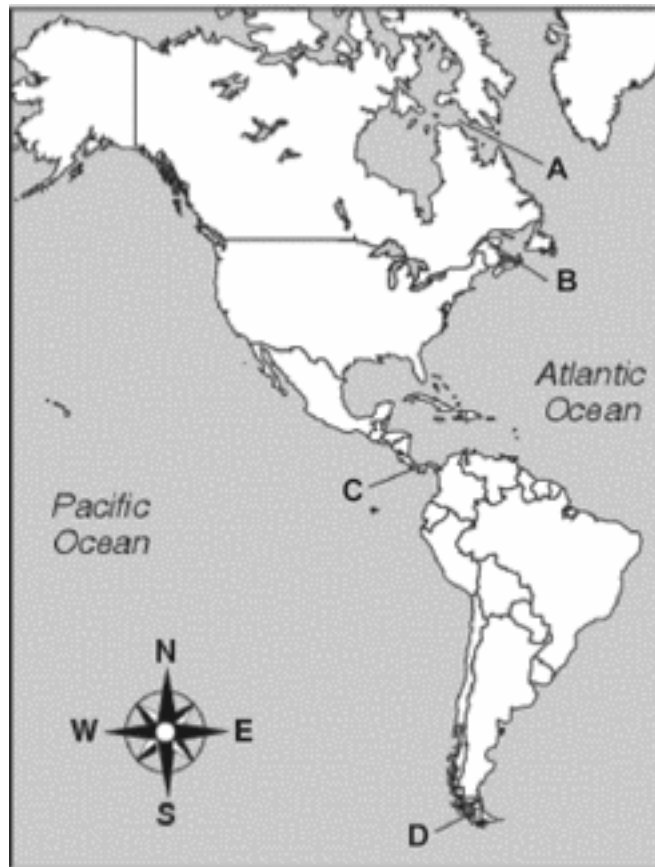
Author: Shari Alexander

School: AUSTIN TRACY ELEMENTARY SCHOOL

Printed: Thursday October 22, 2015

1 Which letter points to the location of the Panama Canal?

North and South America



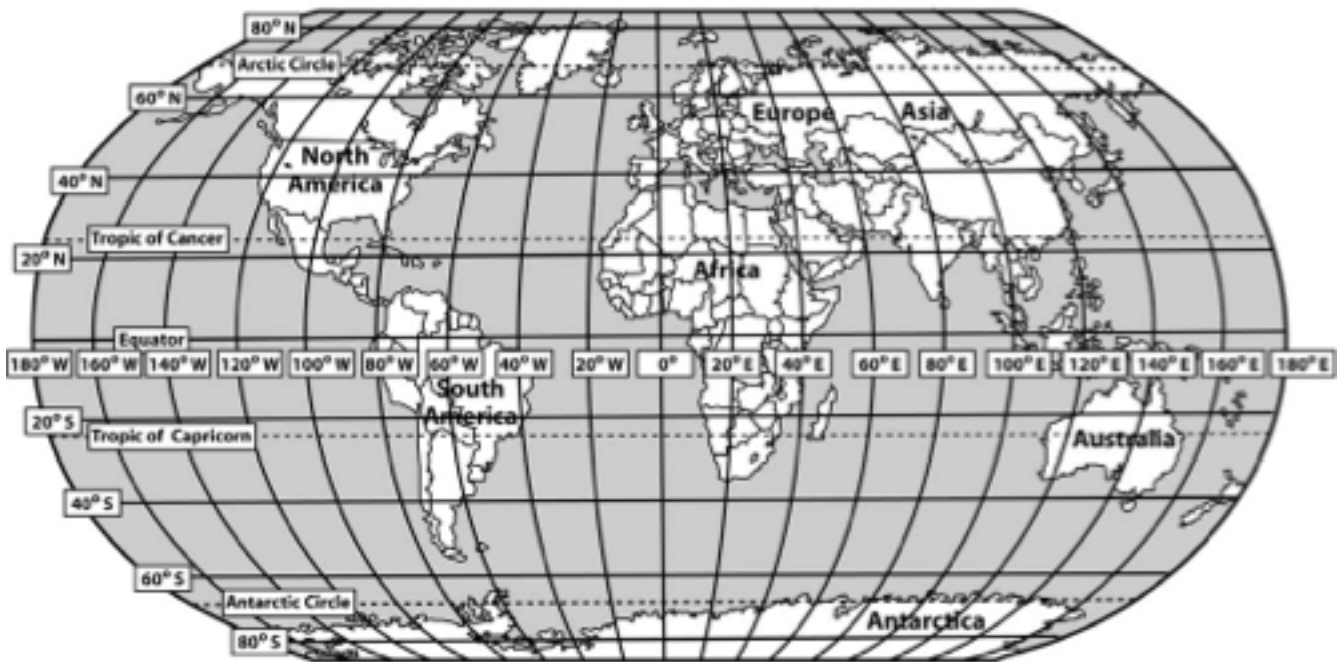
- A A
- B B
- C C
- D D

2 Which state lies furthest north?

- A Oklahoma
- B Wyoming
- C California
- D Tennessee

3

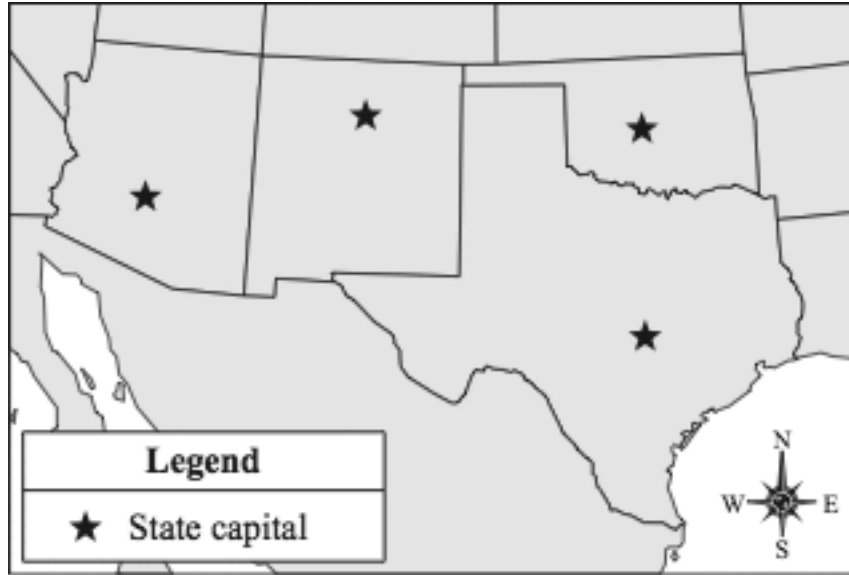
The World



30°S, 60°W is the location for

- A South America.
- B North America.
- C Australia.
- D Asia.

4



What type of map would this be if it also showed rivers and mountains?

- A product map
- B physical map
- C relief map
- D climate map

5 Which geographic feature had the **greatest** impact on the development of the New England colonies?

- A a river
- B a coastal plain
- C an ocean
- D a high plateau

6 Study the list below.

?

- Approves local laws
- Organizes the police force
- Creates local budgets

Which title **best** completes the list?

- A Duties of the President
- B Activities of the City Council
- C Responsibilities of the Senate
- D Powers of the Governor

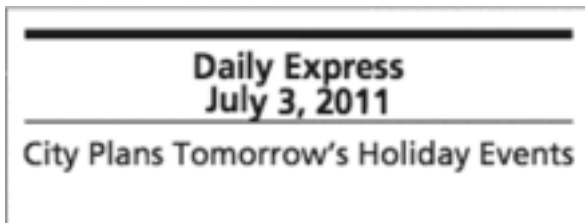
7 Which of these parts of the United States Constitution contains fundamental liberties of American citizens?

- A Preamble
- B Article I, Section 8 — Enumerated Powers
- C Article III — Judicial Branch
- D Amendments 1—10 — Bill of Rights

8 One goal of the Declaration of Independence was to

- A establish a new monarchy for the independent states.
- B convince the British Parliament to prevent the start of war.
- C explain why the colonists felt the need to be free from British rule.
- D outline an economic system to raise money for the revolution.

9 Study the headline below.



What is the reason for the event described in the headline?

- A recognition of workers' rights
- B expansion of civil rights
- C recognition of military veterans
- D celebration of national independence

10 Which of these was the main purpose of the 13th Amendment?

- A to raise taxes
- B to end slavery
- C to provide a trial by jury
- D to list the duties of the president

11 Elizabeth Cady Stanton fought for women's suffrage, which is

- A the right of women to vote
- B the right of women to assemble peaceably
- C the right of women to get an education
- D the right of women to own property

12 Railroads **most** changed American culture by causing

- A cities to grow larger.
- B gold to be found.
- C slaves to be freed.
- D farms to become valuable.

- 13** The photograph below shows a historic sculpture in our nation's capital.



Sculpture by Daniel Chester French;
photograph © Lester Lefkowitz/CORBIS

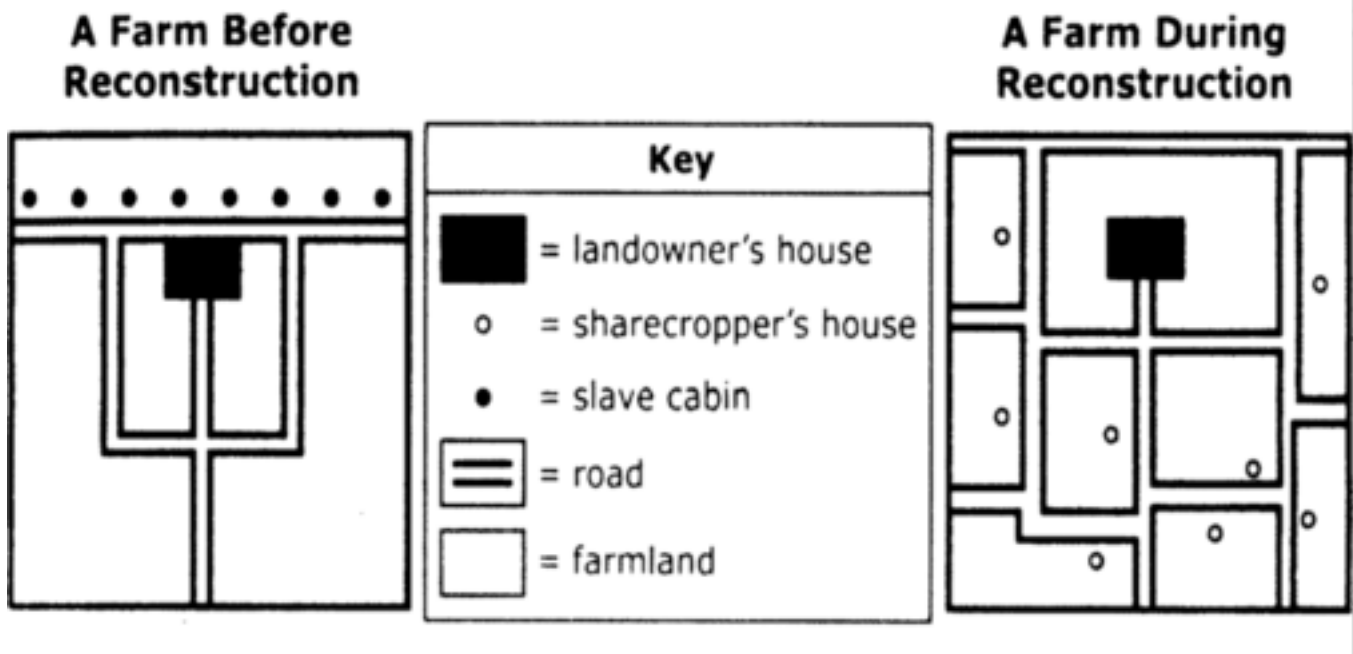
The sculpture in the photograph is located in which of the following buildings?

- A** the White House
 - B** the Lincoln Memorial
 - C** the Jefferson Memorial
 - D** the Washington Monument
- 14** Which event was started by the actions and arrest of Rosa Parks?
- A** Montgomery, Alabama, bus boycott
 - B** Freedom Rides in the South
 - C** March on Washington, D.C.
 - D** Selma-to-Montgomery March

- 15** What agricultural invention, designed to increase production, had the effect of increasing the number of slaves needed for labor in the Deep South?

- A** the wheat reaper
- B** the cotton gin
- C** the steel plow
- D** the rice mill

16 Use your knowledge of Reconstruction and these diagrams to answer the question.



How did life on this farm change during Reconstruction?

- A Workers bought and divided their plots of property.
- B The land was used to grow different types of crops.
- C Workers were responsible for their own crop production.
- D The land was separated into sections for cotton and livestock.

17 Which group of American Indians built adobe shelters on cliffs to protect themselves from heat and enemies?

- A Plains
- B Pueblo
- C Woodland
- D Northwest Coast

?

18

- Food
- Holidays
- Language
- Music
- Religion

Which title completes the list above?

- A Modern Skills
- B Features of Culture
- C Careers in America
- D American Hobbies

19 During the 1500s, European desire for spices led to

- A improvements in farming.
- B the exploration of the East Indies.
- C advances in government.
- D the division of Europe into city-states.

20 Which of the following is NOT helpful to the environment?

- A Planting trees
- B Overpopulating areas
- C Recycling products
- D Conserving water

21 How did Henry Ford's introduction of the assembly line in the automobile industry improve the standard of living for Americans?

- A Fewer cars looked alike.
- B More people could afford to buy cars.
- C Fewer people were needed to build cars.
- D More cars were imported from other countries.

- 22** Josh owns the rookie card of a famous baseball player. Josh bought the card when the player was not very famous and it cost only \$2. Now his friend Eric wants to buy the card from him because he can't find one anywhere else. Josh sells it for \$20. What is the most likely reason the card now sells for \$20?
- A** When the supply is high, the price goes down.
 - B** When the supply is high, the price stays the same.
 - C** When the supply is low, the price is zero.
 - D** When the supply is low, the price goes up.
-
- 23** As the price of gasoline increases in Kentucky, motorists will probably
- A** begin to use more gasoline.
 - B** begin to use less gasoline.
 - C** use the same amount of gasoline.
 - D** completely stop driving cars.
- 24** Which event will **most likely** happen during an economic boom?
- A** The number of people attending football games will decrease.
 - B** The amount of ice cream sold yearly will decrease.
 - C** The number of new houses built yearly will increase.
 - D** The amount of food served at elementary schools will increase.

25 Which situation is an example of bartering?

- A** Choosing a free kitten from an animal center
- B** Buying a candy bar at a grocery store
- C** Washing Pat's car while Pat mows your lawn
- D** Giving Terry a book as a birthday present